


Name \_\_\_\_\_

Date \_\_\_\_\_

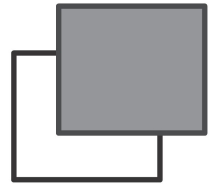
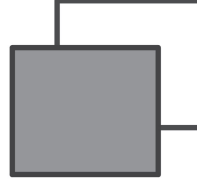
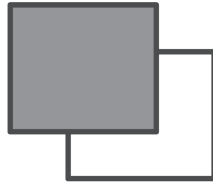
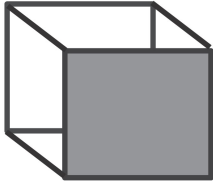
1. Circle the shape that could be the face of a cube.



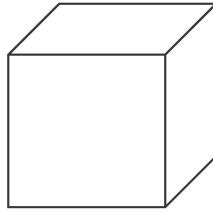
2. What is the most precise name of the shape you circled? \_\_\_\_\_
3. How many faces does a cube have? \_\_\_\_\_
4. How many edges does a cube have? \_\_\_\_\_
5. How many corners does a cube have? \_\_\_\_\_
6. Draw 6 cubes, and put a star next to your best one.

First cube	Second cube
Third cube	Fourth cube
Fifth cube	Sixth cube

7. Connect the corners of the squares to make a different kind of drawing of a cube. The first one is done for you.



8. Derrick looked at the cube below. He said that a cube only has 3 faces. Explain why Derrick is incorrect.



---

---

---